



Model Exam 1

Question 1:

A) Find:

a)
$$\begin{array}{r} 644 \\ + 203 \\ \hline \end{array}$$

.....

b)
$$\begin{array}{r} 9 \\ \times 3 \\ \hline \end{array}$$

.....

c)
$$\begin{array}{r} 300 \\ - 150 \\ \hline \end{array}$$

.....

d)
$$\begin{array}{r} \text{.....} \\ 5 \end{array}$$

$$\begin{array}{r} \text{.....} \\ 35 \end{array}$$

B) Choose:

a) 6×4

($18 - 24 - 10$)

b) $\frac{1}{4} =$

(Fourth – fifth – sixth)

c) $7 + 7 + 7 =$

($7 \times 5 - 7 \times 3 - 7 \times 2$)

d) $40 \div 5 =$

(9 , 7 , 8)

e) Just After March

(April – May – October)

f) $10 \times 8 <$

(79 , 80 , 81)

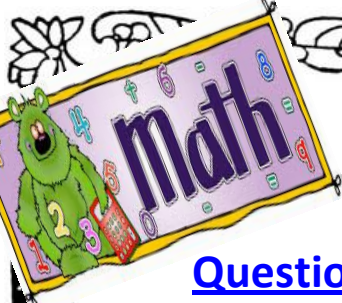
g) $28 \div 4 = 7$, 28 is called

(Dividend – Divisor – quotient)

C) Heba distributed 36 balls among 4 girls . How many balls each girl take ?

.....





Question 2:

A) Mona has 40 pounds . Can she buy 8 dolls if each one is 4 pounds ?

.....

B) $35 \div 5 = 7$

35 is called

5 is called

7 is called

C) Complete:

a) $7 \times \dots = 3 \times \dots = \dots$

b) $1 \text{ kg} = \dots + \dots + \dots$



c) $5 \times \dots = 9 \times \dots = \dots$

d) $75 \text{ min} = \dots \text{ hour and } \dots \text{ min.}$

e) $5 \times 8 + 100 = \dots$

D) How many seventh in whole one?.....

E) What's the time?



..... :

..... :





E) Compare:

a) 4×8

8×4

b) 1

$\frac{5}{5}$

c) 4 kg and half

4kg and quarter

d) Sixth

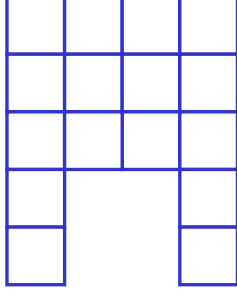
Tenth

e) $3 \times 7 + 10$


$30 + 1$

Question 3:

A) Find the perimeter:



P=.....



P=.....

B) Eyad has 50 pounds; Can he buy 3 toys each for 6 pounds?

.....

C) Arrange in ascending order:

$\frac{1}{2}$, $\frac{1}{5}$, $\frac{1}{3}$, 1 , $\frac{1}{10}$

..... , , , ,





Question 4:

A) Put (✓) or (✗):

a) We celebrate Elfetre feast in shawwal . ()

b) $1 \text{ kg} = \frac{1}{2} \text{ kg} + \frac{1}{2} \text{ kg}$. ()

c) $3 \times 7 = 56$ ()

d) $4 \times 5 + 9 = 39$ ()

e) $28 \div 4 = 7$ ()

B) Complete in the same pattern :-

a- $2 \times 4, 2 \times 5, 2 \times 6, \dots, \dots, \dots$

b- 

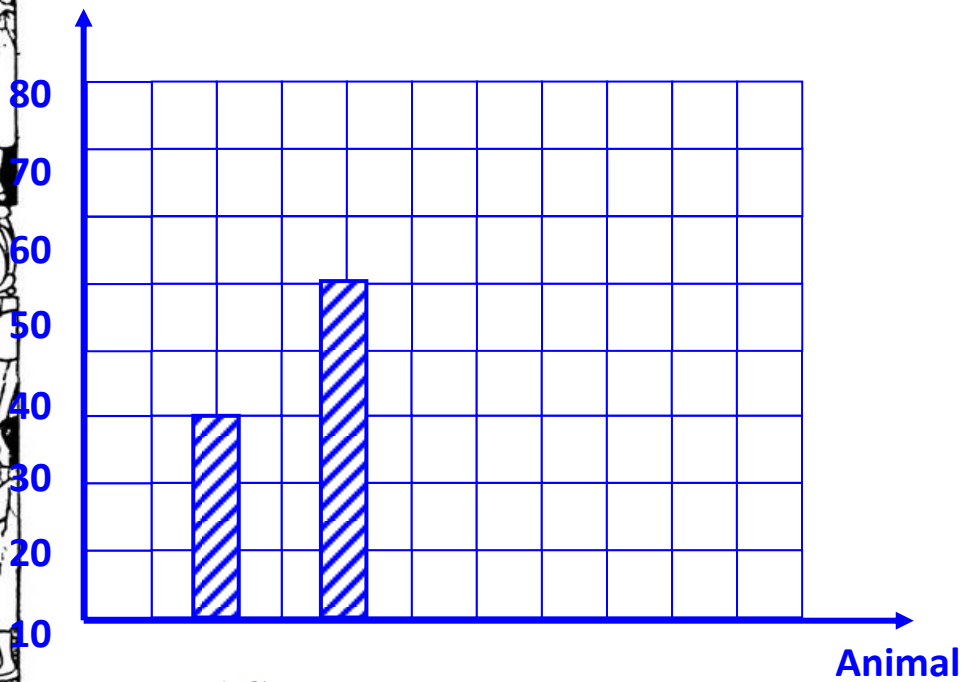
c- $40, 36, 32, \dots, \dots, \dots$









C) Complete the graph and table:

No. of animal



Type	Number of Animals


	70
	10

D) Complete :-

- a) 1 hours and third = min
- b) 90 min = hours = min
- c) $35 \div 5 = \dots\dots\dots$
- d) $4 \times 8 + 9 = \dots\dots\dots$
- e) $2 \times 6 = \dots\dots\dots \times 3 = 12$





Model Exam 2

Question 1:

A) Complete:

a-
$$\begin{array}{r} 415 \\ + 398 \\ \hline \dots\dots \end{array}$$

b-
$$\begin{array}{r} \\ 3 \quad \overline{) 24} \end{array}$$

c-
$$\begin{array}{r} 5 \\ \times 7 \\ \hline \dots\dots \end{array}$$

d-
$$\begin{array}{r} 2 \\ \times \dots\dots \\ \hline 12 \end{array}$$

e- $3 + 3 + 3 + 3 = \dots\dots \times \dots\dots = \dots\dots$

f- $3 \times \dots\dots = 4 \times \dots\dots = 24$

g- Two hours and 50 min = $\dots\dots$ min.

h- $9 \times 1 - 3 = \dots\dots$

i- $1 \text{ kg} = \frac{1}{2} \text{ kg} + \dots\dots + \dots\dots$

j- $1 = \frac{\dots\dots}{99} = \frac{6}{\dots\dots} = \frac{34}{\dots\dots}$

k- $0 \times 30 + 6 = \dots\dots$

l- $\dots\dots + 583 = 900$

Question 2:

A) Arrange in ascending order:

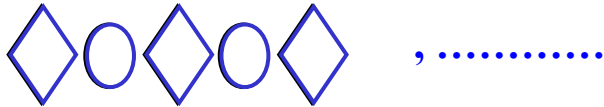
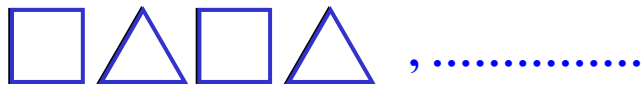
$\frac{1}{2} \text{ kg}, 1 \text{ kg}, 2 \text{ kg}, \frac{1}{4} \text{ kg}$

..... , , ,






B) Complete in the same pattern :



C) How many third in whole one?

D) Radwa bought 18 pieces of chocolates for 3 students . how many chocolate each one take ?


E) Find the perimeter:



P =


Question 3:

A) Write the fraction (in digits & letters):



.....

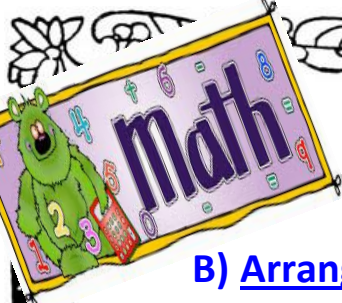
.....



.....

.....





B) Arrange in ascending order:


500 - 499 , $\frac{1}{9}$, $\frac{1}{2}$, $\frac{1}{4}$, $\frac{1}{5}$

..... , , , ,


C) Each cat has 4 legs, How many legs are there in 8 cats?

Number of legs =

d) What's the time ?



It's




It's

Question 4:

A) Choose:

- a- $6 \times \dots = 5 \times 6 = 30$ (5 - 7 - 6)
- b- $20 \div 4 = \dots$ (5 - 4 - 24)
- c- Muharram , , Rajab First (shaban - safar - ramdan)
- d- This fraction $\frac{1}{8}$ is (eight - eighth)
- e- What's after December (September - January - November)





f- The place value of 9 in 907 is (Hundred – tens – 900)

g- What's lies between Rajab and ramdan (shawaal – zu'lhijjah – shaban)

B) Compare:

a- 2×6

3×4

b- 3×10

$3 + 10$

c- $2\frac{1}{4}$ kg

$2\frac{1}{2}$ kg

d- $\frac{1}{3}$

$\frac{1}{4}$


e- 90 min

1 hour and half

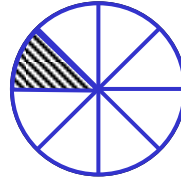
f- Third an hour

20 min

C) Write the fraction of the colored parts in digits:



.....



.....



.....





Question 5:

A) Put (✓) or (×):


a) $3 \times 7 + 2 \times 5 = 41$ ()

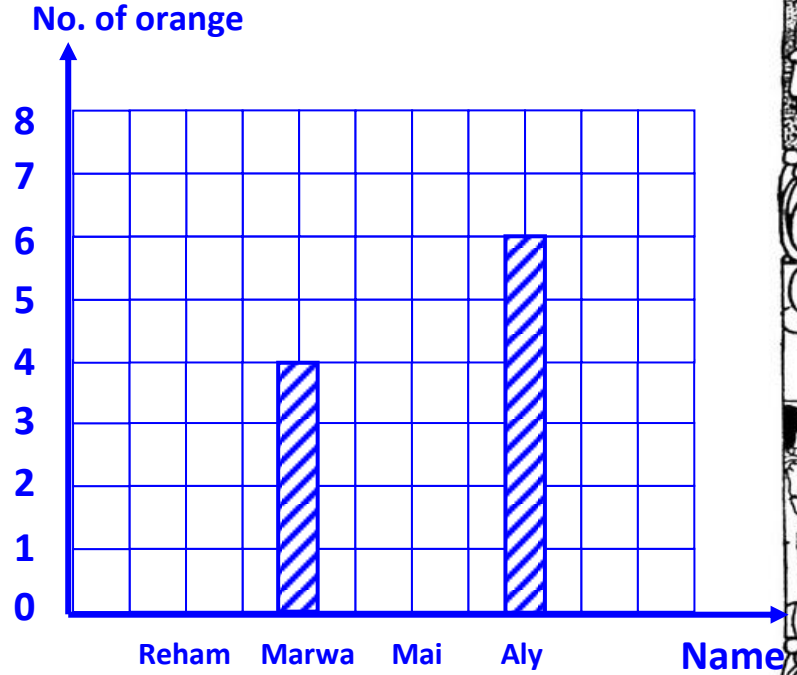
b) $5 \times 3 = 3 + 3 + 3 + 3 + 3$ ()

c) $2 \times 9 = 9 + 2$ ()

B) The following table represents the number of oranges that were eaten by 5 students during the week:

• Complete the table and the graph:

Name	Marks	Number of 
Reham		3
Marwa	////	
Mai		5
Aly	//// \	



C) Join:

- 1 kg ☺ 30
- 1hour and 20 min. ☺ $\frac{1}{2}$ kg + $\frac{1}{2}$ kg
- 6×5 ☺ 80 min





D) Complete:-

$$40 \div 4 = 10$$

4 is called

10 is called

40 is called





Model Exam 3

Question 1:

A) Solve the following

a- An hour and third = min

b- $5 \times \dots = 10 \times \dots = 40$

c- $7 \times 2 = \dots + \dots$

d- The place value of 5 in 625 is

B) Nahla's weight is 58 Kg and Angie's weight is 69 Kg . what is the sum of their weights ?.....

Question 2:

A) Find : a)



b)

$$\begin{array}{r} 601 \\ - 455 \\ \hline \dots \end{array}$$

c)

$$\begin{array}{r} 3 \\ \times 9 \\ \hline \dots \end{array}$$

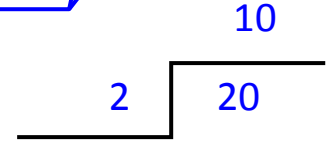
d) $30 \div 5 = 6$

30 is called

6 is called

5 is called

e)




10 is called

2 is called

20 is called





B) Choose the right answer:

a- $3+3 = \dots\dots\dots$ ($3 \times 2 - 3 \times 4 - 3 \times 0$)

b- $9 \times 4 + 10 = \dots\dots\dots$ ($48 - 46 - 50$)

c- $75 \text{ min} = 1 \text{ Hours}, \dots\dots \text{ min}$ ($25 - 35 - 15$)

d- $5 + 5 + 5 + 5 + 5 = 5 \times \dots\dots\dots$ ($4 - 6 - 5$)

e- How many thirds in whole one? $\dots\dots\dots$ ($30 - 3 - \text{third}$)

f- $0 \times 6 = \dots\dots\dots$ ($0 - 6 - 60$)

C) Arrange in descending order.

$\frac{1}{4}$, $\frac{1}{10}$, $\frac{1}{3}$, $\frac{1}{9}$, 1

$\dots\dots\dots$, $\dots\dots\dots$, $\dots\dots\dots$, $\dots\dots\dots$, $\dots\dots\dots$

Question 3:

A) Aly has 300 marbles and omar has 105 marbles What's the difference between them ?

$\dots\dots\dots$





B) Compare:

a- 150 min

1 hour and half


b- Fifth

$\frac{1}{10}$


c- 3 kg and half

4 kg and quarter

C) What's the time ?



It's



It's

Question 4

A) Complete the following:

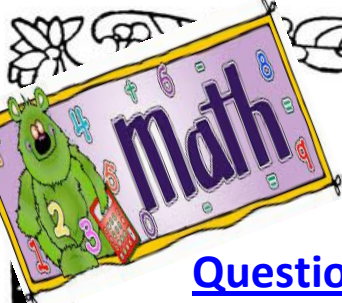
- 1 kg = kg + kg
- $1 = \frac{2}{\dots} = \frac{50}{\dots} = \frac{\dots}{18} = \frac{20}{\dots}$
- 90 minutes = hours , min
- An hour and a quarter = min
- Two hours and 50 min = min
- min = an hour and half

B) Arrange in ascending order :-

0×10 , 2×5 , 4×8 , 5×7 , 3×10

..... , , , ,

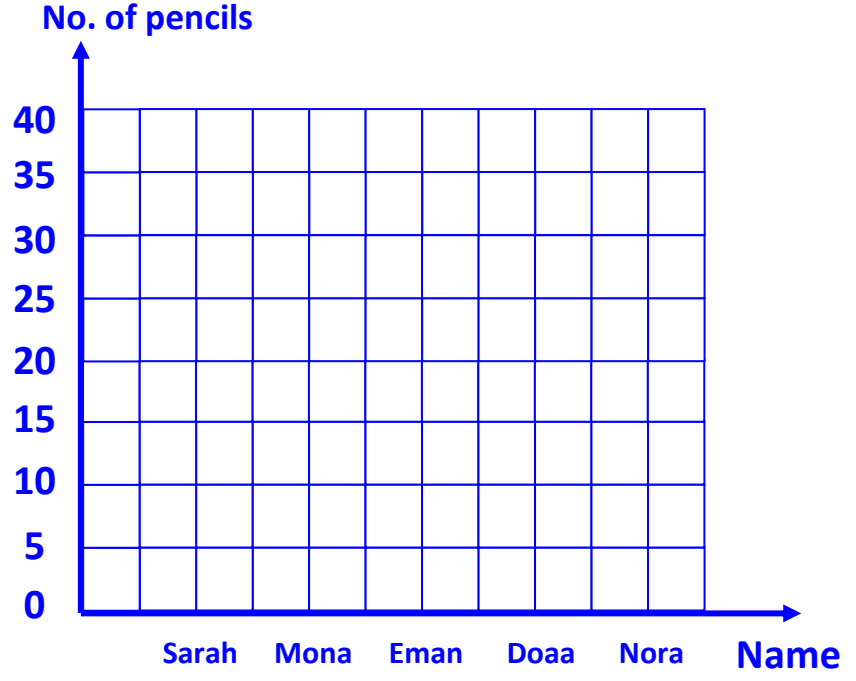




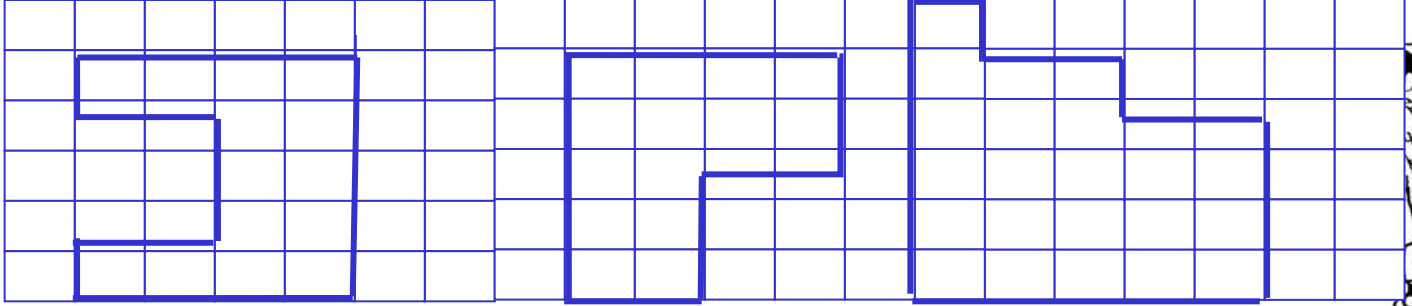
Question 5:

A) Complete the following graph according to the table:

Name	Number of pencils
Sarah	5
Mona	30
Eman	15
Doaa	20
Nora	10



B) Find the perimeter:-



P. =

P. =

P. =





Model Exam 4

Question 1:

A) Complete:

a-

$$\begin{array}{r} 465 \\ + 359 \\ \hline \dots\dots \end{array}$$

b-

$$\begin{array}{r} 409 \\ - 263 \\ \hline \dots\dots \end{array}$$

c-

$$\begin{array}{r} 4 \\ \times 7 \\ \hline \dots\dots \end{array}$$

d-

$$\begin{array}{r} 2 \\ \times 8 \\ \hline 16 \end{array}$$

e- $3 \times 8 + 20 = \dots\dots$

f- $\dots\dots + \dots\dots + \dots\dots = 3 \times 2$

g- $4 \times \dots\dots = 2 \times \dots\dots = 16$

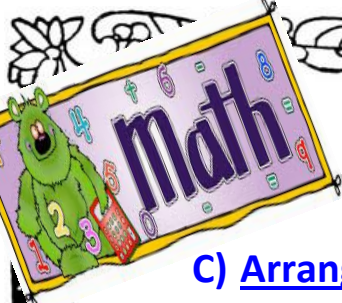
h- 1 hour and half = $\dots\dots$ min

i- $1 = \frac{2}{\dots\dots} = \frac{\dots\dots}{3} = \frac{14}{\dots\dots}$

B) Ahmed wants to distribute 8 books among 4 students , how many book each one will take

Each one will take = $\dots\dots\dots\dots\dots\dots$





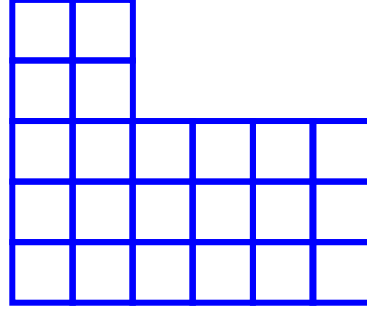
C) Arrange in ascending order:

Tenth , 300 – 299 , $\frac{1}{7}$, $\frac{1}{2}$, $\frac{1}{4}$

..... , , , ,

Question 2:

A) Find the perimeter:



P =

B) Compare:

a) $\frac{1}{7}$



b) $4 + 4 \times 3$

$4 + 4 + 3$

c) $300 - 299$

$\frac{10}{10}$

d) $5\frac{1}{2}$ kg

$6\frac{1}{4}$ kg

e) Fifth

Five





C) Amira bought a toy for 180 pound and 4 cars each for 10 pound.

How much money did she pay ?

.....

.....

Question 3:

A) Choose the correct answer:

a) The month that's after rajab is (Ramdan – Shaban – Safar)

b) $1 = \frac{\dots\dots}{4}$ (4 , 1 , 5)

c) 2 hours and third = min (140 - 120 - 130)

d) $\frac{1}{2}$ kg + $\frac{1}{2}$ kg = (1 kg – 2 kg – $\frac{1}{2}$ kg)

B) How many ninth are there in whole one?

C) Join:

a) 10×3 ☀ 2×5

b) 3×8 ☀ 5×6

c) $27 \div 3$ ☀ 4×6

d) 3×4 ☀ 3×3

e) $40 \div 4$ ☀ 6×2







D) Complete :

- a) \times 6 = \times 3 =
- b) 140 min = min , hours
- c) 500 + = 732
- d) $5 \times 4 = \dots + \dots + \dots + \dots + \dots$
- e) 1 kg = + +
- f) Third an hour =
- g) $15 \div 3 = \dots$
- h) $2 \times \dots = 8$

E) What's the time In digits ?



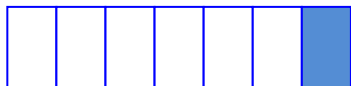
..... :



..... :

Question 4:

A) Write the fraction of the coloured parts: (in digits and letters):



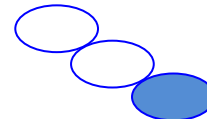
.....

.....



.....

.....



.....

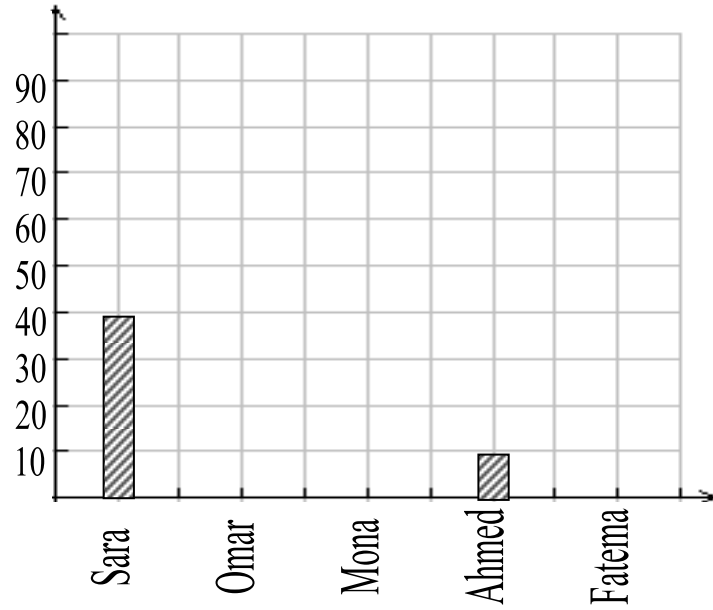
.....





B) Complete the table and the bar line graph:-

Name	Number of books
Sara
Omar	60
Mona	20
Ahmed
Fatema	50



C) Complete in the same pattern:

- $5 \times 2, 6 \times 2, \dots, \dots, \dots$
- $210, 230, \dots, \dots, \dots$
- $16, 20, 24, \dots, \dots, \dots$

D) Put (✓) or (✗):

- a) $5 \times 4 + 3 \times 6 = 20$ ()
- b) The greatest 2 digit numbers is 100 ()
- c) $6 \times 5 = 6 + 6 + 6 + 6 + 5$ ()
- d) $6 \times 5 > 31$ ()
- e) Just After Muharram is Ramdan ()





Answers Model Exam 1

Question 1:

A) Find:

$$\begin{array}{r} 644 \\ + 203 \\ \hline 847 \end{array}$$

$$\begin{array}{r} 9 \\ \times 3 \\ \hline 27 \end{array}$$

$$\begin{array}{r} 300 \\ - 150 \\ \hline 150 \end{array}$$

$$\begin{array}{r} 7 \\ \hline 5 \quad 35 \end{array}$$

B) Choose:

a) $6 \times 4 = \dots\dots$

(18 - **24** - 10)

b) $\frac{1}{4} = \dots\dots$

(**Fourth** - fifth - sixth)

c) $7 + 7 + 7 = \dots\dots\dots$

($7 \times 5 - 7 \times 3 - 7 \times 2$)

d) $40 \div 5 = \dots\dots\dots$

(9 , 7 , 8)

e) Just After March

(**April** - May - October)

f) $10 \times 8 < \dots\dots\dots$

(79 - 80 - **81**)

g) $28 \div 4 = 7$, 28 is called

(**Dividend** - Divisor - Quotient)

C) Heba distributed 36 balls among 4 girls . how many balls each girl take ?

$36 \div 4 = 9$ balls .





Question 2:

A) Mona has 40 pounds . Can she buy 8 dolls if each one is 4 pounds ?

$8 \times 4 = 32$ Pounds . yes she can

.....

B) $35 \div 5 = 7$

35 is called **Dividend**

5 is called **Divisor**

7 is called **Quotient**

D) Complete:

a) $7 \times \dots 3 = 3 \times \dots 7 = \dots 21$

b) $1 \text{ kg} = \dots \frac{1}{2} \dots \text{Kg} + \dots \frac{1}{4} \dots \text{Kg} + \dots \frac{1}{4} \dots \text{Kg}$

c) $5 \times 9 = 9 \times 5 = 45$ Kg

d) $75 \text{ min} = \dots 1 \dots \text{hour and } \dots 15 \dots \text{min.}$


e) $5 \times 8 + 100 = 140$






E) How many seventh in whole one?.....

F) What's the time?



.....2..... :00.....



.....4..... :30.....

F) Compare:

a) 4×8 8×4

b) 1 $\frac{5}{5}$

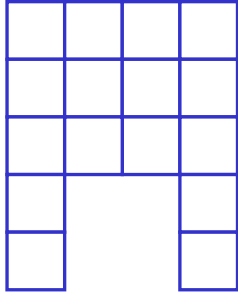
c) 4 kg & half 4kg & quarter

d) Sixth Tenth

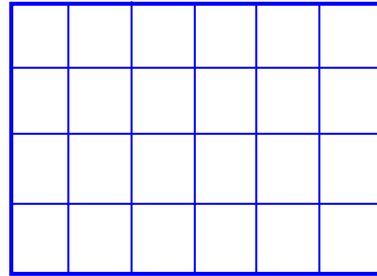
e) $3 \times 7 + 10$ $30 + 1$

Question 3:

A) Find the perimeter:



P=...22 units.....



P=...20 units.....





B) Eyad has 50 pounds; Can he buy 3 toys each for 6 pounds?

$3 \times 6 = 18$ pounds , yes he can.

C) Arrange in ascending order:

$$\frac{1}{10}, \frac{1}{2}, \frac{1}{5}, \frac{1}{3}, \frac{1}{2}, \frac{1}{10}$$

Question 4:

A) put (✓) or (×):

a) We celebrate Elfetre feast in shawwal . (✓)

b) $1 \text{ kg} = \frac{1}{2} \text{ kg} + \frac{1}{2} \text{ kg}$. (✓)

c) $3 \times 7 = 56$ (×)

d) $4 \times 5 + 9 = 39$ (×)

e) $28 \div 4 = 7$ (✓)

B) Complete in the same pattern :-

a- $2 \times 4, 2 \times 5, 2 \times 6, 2 \times 7, 2 \times 8, 2 \times 9$

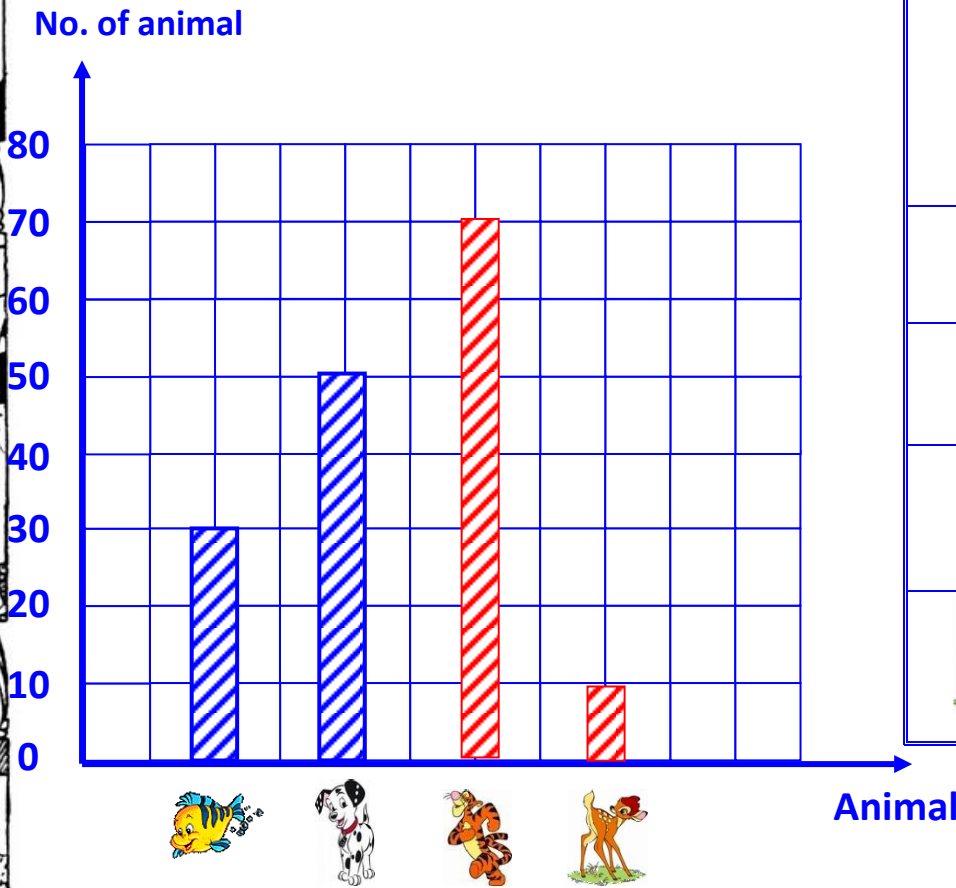
b- 

c- $40, 36, 32, 28, 24, 20$





C) Complete the graph and table:



Type	Number of Animals
	30
	50
	70
	10

D) Complete :-

a) 1 hours and third = 80 min

b) 90 min = 1 hours = 30 min

c) $35 \div 5 = 7$

d) $(4 \times 8) + 9 = 41$

e) $2 \times 6 = 4 \times 3 = 12$





Model Exam 2

Question 1:

A) Complete

a-
$$\begin{array}{r} 415 \\ + 398 \\ \hline 813 \end{array}$$

b-
$$\begin{array}{r} 8 \\ \hline 3 \quad 24 \end{array}$$

c-
$$\begin{array}{r} 5 \\ \times 7 \\ \hline 35 \end{array}$$

d-
$$\begin{array}{r} 2 \\ \times \dots 6 \dots \\ \hline 12 \end{array}$$

e- $3 + 3 + 3 + 3 = \dots 3 \dots \times \dots 4 \dots = \dots 12 \dots$

f- $3 \times \dots 8 \dots = 4 \times \dots 6 \dots = 24$

$60 + 60 + 50$

g- Two hours and 50 min = $\dots 170 \dots$ min.

h- $(9^9 \times 1) - 3 = \dots 6 \dots$

i- $1 \text{ kg} = \frac{1}{2} \text{ kg} + \dots \frac{1}{4} \dots \text{kg} + \dots \frac{1}{4} \dots \text{kg}$

j- $1 = \frac{\dots}{99} = \frac{6}{\dots 6 \dots} = \frac{34}{\dots 34 \dots}$

k- $(0 \times 30) + 6 = \dots 6 \dots$

l- $\dots 317 \dots + 583 = 900$

$$\begin{array}{r} 8910 \\ 900/- 583 \\ \hline 317 \end{array}$$
 r.w

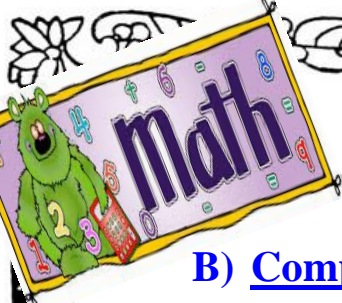
Question 2:

A) Arrange in ascending order:

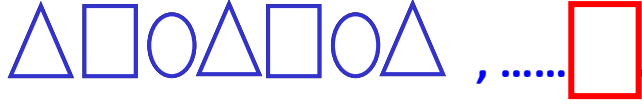
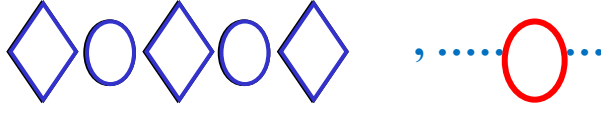
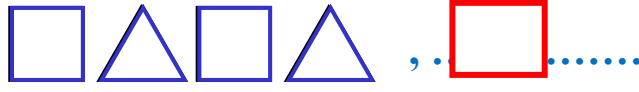
$\frac{1}{2} \text{ kg}, 1 \text{ kg}, 2 \text{ kg}, \frac{1}{4} \text{ kg}$

$\frac{1}{4} \text{ kg}, \frac{1}{2} \text{ kg}, 1 \text{ kg}, 2 \text{ kg}$






B) Complete in the same pattern :



C) How many third in whole one?...3 thirds

D) Radwa bought 18 pieces of chocolates for 3 students . how many chocolate each one take ? $18 \div 3 = 6$ chocolate

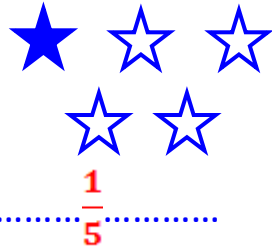
E) Find the perimeter:



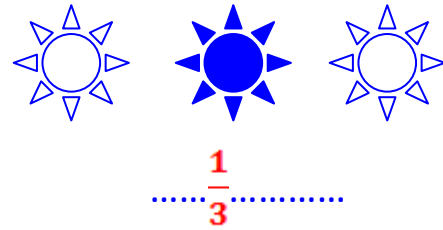
P = 22 units

Question 3:

A) Write the fraction (in digits & letters):



..... **fifth**



..... **Third**





B) Arrange in ascending order:


$$500 - 499, \frac{1}{9}, \frac{1}{2}, \frac{1}{4}, \frac{1}{5}$$

$$\frac{1}{9}, \frac{1}{5}, \frac{1}{4}, \frac{1}{2}, \frac{1}{5}$$


C) Each cat has 4 legs, How many legs are there in 8 cats?

Number of legs = $4 \times 8 = 32$ legs

d) What's the time ?



It's **15 min past 7**



It's **30 min past 1**

Question 4:

A) Choose:

a) $6 \times \dots = 5 \times 6 = 30$ (**5 - 7 - 6**)

b) $20 \div 4 = \dots$ (**5 - 4 - 24**)

c) Muharram ,, Rajab First (shaban - **safar** - ramdan)

d) This fraction $\frac{1}{8}$ is (eight - **eighth**)

e) What's after December (September - **January** - November)





f) The place value of 9 in 907 is (**Hundred** – tens – 900)

g) What's lies between Rajab and ramdan (shawaal – zu'lhijjah – **shaban**)

B) Compare:

a- 2×6 **12** **12** 3×4

b- 3×10 **30** **13** $3 + 10$


c- $2 \frac{1}{4}$ kg $2 \frac{1}{2}$ kg

d- $\frac{1}{3}$ $\frac{1}{4}$

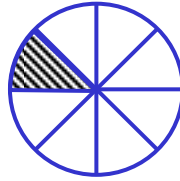
e- 90 min **60 + 30 = 90 min**
1 hour and half

f- **20 min**
Third an hour 20 min

C) Write the fraction of the colored parts in digits:



$$\frac{2}{6}$$



$$\frac{1}{8}$$



$$\frac{1}{4}$$





Question 5:

A) Put (✓) or (×):






a) $3 \times 7 + 2 \times 5 = 41$ (×)

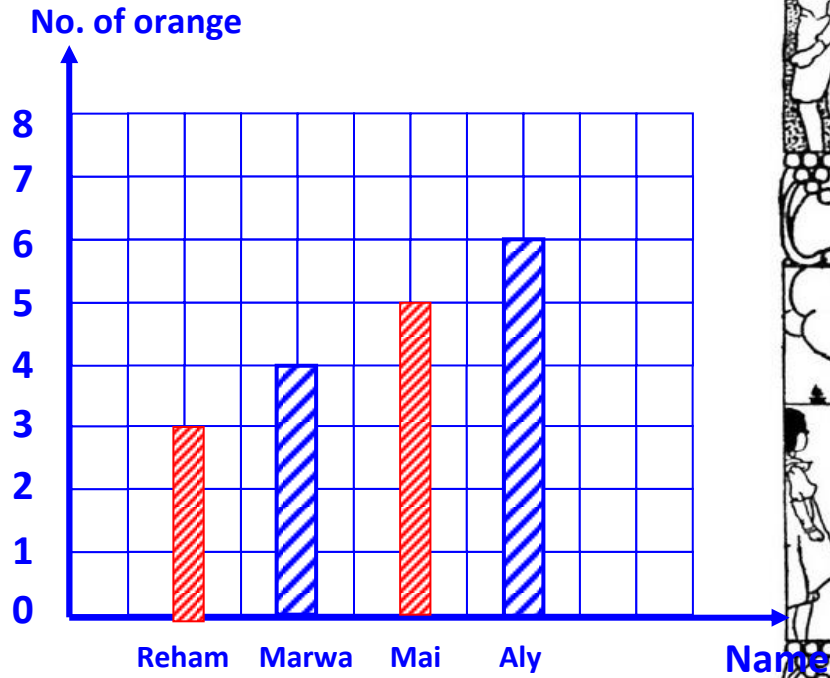
b) $5 \times 3 = 3 + 3 + 3 + 3 + 3$ (✓)

c) $2 \times 9 = 9 + 2$ (×)







B) The following table represents the number of oranges that were eaten by 5 students during the week:

• Complete the table and the graph:

Name	Marks	Number of 
Reham		3
Marwa		4
Mai		5
Aly		6



C) Join:

- 1 kg   30
- 1 hour and 20 min.   $\frac{1}{2}$ kg + $\frac{1}{2}$ kg
- 6×5   80 min





D) Complete:-

$$40 \div 4 = 10$$

4 is called **Divisor**

10 is called **Quotient**

40 is called **Divident**





Model Exam 3

Question 1:

A) Solve the following

a- An hour and third =80..... min

b- $5 \times \dots 8 \dots = 10 \times \dots 4 \dots = 40$

c- $7 \times 2 = \dots 7 \dots + \dots 7 \dots$

d- The place value of 5 in 625 is ...units.....

B) Nahla's weight is 58 Kg and Angie's weight is 69 Kg . what is the sum of their weights ? $58 + 69 = 127$ kg

Question 2:

A) Find: a)
$$\begin{array}{r} 6 \\ 3 \overline{) 18} \end{array}$$

b)
$$\begin{array}{r} 9 \\ 601 \\ - 455 \\ \hline \dots 146 \dots \end{array}$$

c)
$$\begin{array}{r} 3 \\ \times 9 \\ \hline \dots 27 \dots \end{array}$$

d) $30 \div 5 = 6$

30 is called **Dividend**

6 is called **Quotient**

5 is called **Divisor**

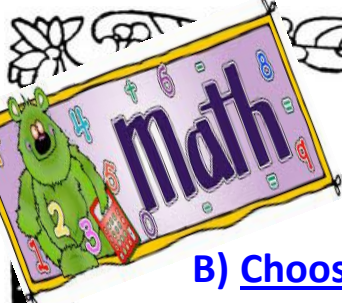
e)
$$\begin{array}{r} 10 \\ 2 \overline{) 20} \end{array}$$

10 is called **Quotient**

2 is called **Divisor**

20 is called **Dividend**





B) Choose the right answer:

a- $3 + 3 = \dots\dots\dots$ ($3 \times 2 - 3 \times 4 - 3 \times 0$)
36

b- $9 \times 4 + 10 = \dots\dots\dots$ ($48 - 46 - 50$)

c- $75 \text{ min} = 1 \text{ Hours}, \dots\dots \text{ min}$ ($25 - 35 - 15$)

d- $5 + 5 + 5 + 5 + 5 = 5 \times \dots\dots\dots$ ($4 - 6 - 5$)

e- How many thirds in whole one? $\dots\dots\dots$ ($30 - 3 - \text{third}$)

f- $0 \times 6 = \dots\dots\dots$ ($60 - 6 - 0$)

C) Arrange in descending order.

$\frac{1}{4}$, $\frac{1}{10}$, $\frac{1}{3}$, $\frac{1}{9}$, 1

1 $\frac{1}{3}$ $\frac{1}{4}$ $\frac{1}{9}$ $\frac{1}{10}$

Question 3:

A) Aly has 300 marbles and omar has 105 marbles What's the difference between them ?

$300 - 105 = 195 \text{ marbles}$





B) Compare:

a- 150 min



$$60 + 30 = 90$$

1 hour and half

b- Fifth




$$\frac{1}{10}$$

c- 3 kg and half




4 kg and quarter

C) What's the time ?



It's **15 min past 3**



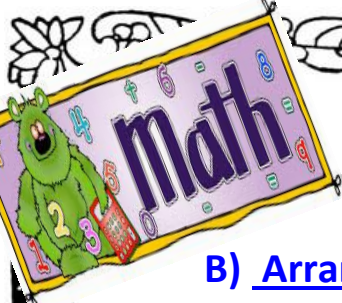
It's **10 o'clock**

Question 4

A) Complete the following:

- $1 \text{ kg} = \dots\dots\dots \frac{1}{2} \dots\dots \text{ kg} + \dots\dots\dots \frac{1}{2} \dots\dots \text{ kg}$
- $1 = \frac{2}{\dots 2 \dots} = \frac{50}{\dots 50 \dots} = \frac{\dots 18 \dots}{18} = \frac{20}{\dots 20 \dots}$
- 90 minutes =**1**..... hours ,**30**..... min
- An hour and a quarter = **75** min
- Two hours and 50 min = **170** min
- **90** min = an hour and half





B) Arrange in ascending order :-

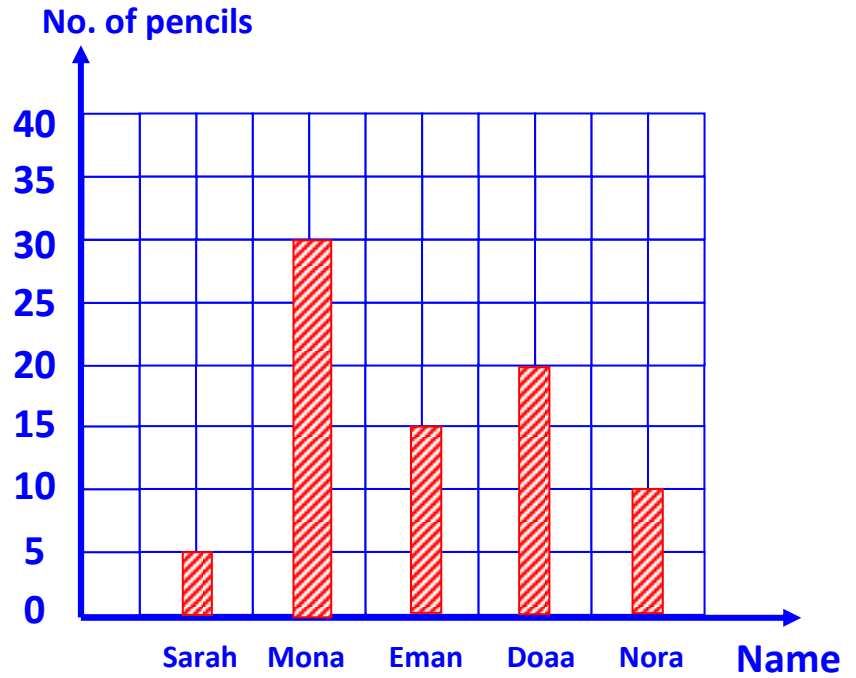
$0 \times 10, 2 \times 5, 4 \times 8, 5 \times 7, 3 \times 10$

$0 \times 10, 2 \times 5, 3 \times 10, 4 \times 8, 5 \times 7$

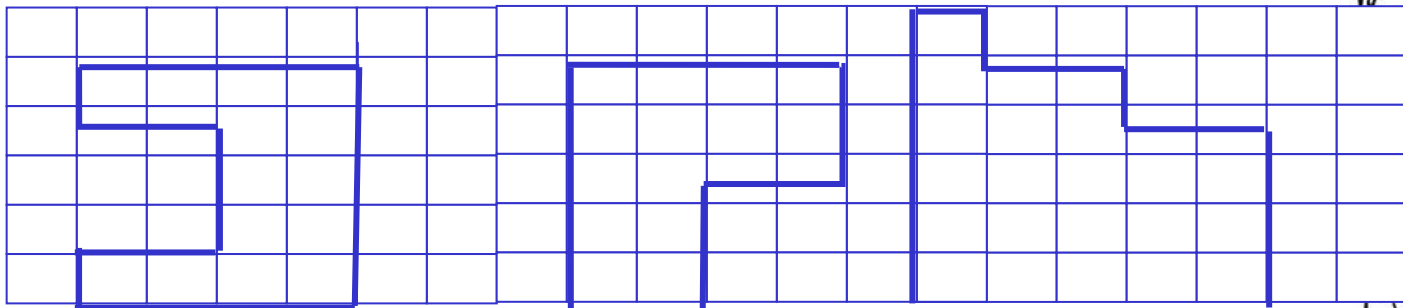
Question 5:

A) Complete the following graph according to the table:

Name	Number of pencils
Sarah	5
Mona	30
Eman	15
Doaa	20
Nora	10



B) Find the perimeter:-



P. = 20 units

P. = 16 units

P. = 20 units





Model Exam 4

Question 1:

A) Complete:

a-

$$\begin{array}{r} 465 \\ + 359 \\ \hline \dots 824 \dots \end{array}$$

b-

$$\begin{array}{r} 409 \\ - 263 \\ \hline \dots 146 \dots \end{array}$$

c-

$$\begin{array}{r} 4 \\ \times 7 \\ \hline \dots 28 \dots \end{array}$$

d-

$$\begin{array}{r} 8 \\ \times 2 \\ \hline 16 \end{array}$$

e) $(3 \times 8) + 20 = \dots 44 \dots$

f) $\dots 2 \dots + \dots 2 \dots + \dots 2 \dots = \cancel{3} \times 2$

g) $4 \times \dots 4 \dots = 2 \times \dots 8 \dots = 16$

$60 + 30 = 90$

h) 1 hour and half = $\dots 90 \dots$ min

i) $1 = \frac{2}{\dots 2 \dots} = \frac{\dots 3 \dots}{3} = \frac{14}{\dots 14 \dots}$

B) Ahmed wants to distribute 8 books among 4 students , how many book each one will take

Each one will take = $8 \div 4 = 2$ books





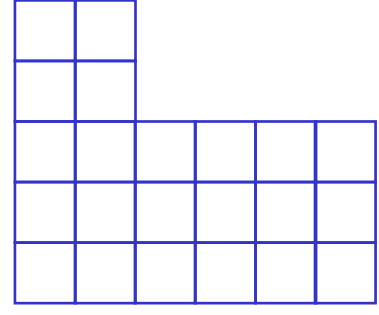
C) Arrange in ascending order:

Tenth , $300 - 299$, $\frac{1}{7}$, $\frac{1}{2}$, $\frac{1}{4}$

Tenth..... , $\frac{1}{7}$, $\frac{1}{4}$, $\frac{1}{2}$, ...1.....

Question 2:

A) Find the perimeter:



P= 22 units

B) Compare:

a) $\frac{1}{7}$



b) $4 + 4 \times 3$

$4 + 4 + 3$

c) $300 - 299$

$\frac{10}{10}$

d) $5\frac{1}{2}$ kg

$6\frac{1}{4}$ kg

e) Fifth

Five





C) Amira bought a toy for 180 pound and 4 cars each for 10 pound.

How much money did she pay ?

The cost of cars = $4 \times 10 = 40$ pounds

$180 + 40 = 220$ ppounds

Question 3:

A) Choose the correct answer:

a) The month that's after Rajab is (Ramadan , **Shaban** , Safar)

b) $1 = \frac{\dots\dots}{4}$ (**4** , 1 , 5)

$60 + 60 + 20 = 140$

c) 2 hours and third = min (**140** - 120 - 130)

d) $\frac{1}{2}$ kg + $\frac{1}{2}$ kg = (**1 kg** - 2 kg - $\frac{1}{2}$ kg)

B) How many ninth are there in whole one?9

C) Join:

a) 10×3	2×5
b) 3×8	5×6
c) $27 \div 3$	4×6
d) 3×4	3×3
e) $40 \div 4$	6×2

Note: Red lines connect the equations to their results: a to 30, b to 24, c to 9, d to 12, e to 10.





D) Complete :

a) $3 \times 6 = 6 \times 3 = 18$

b) $140 \text{ min} = \dots 20 \dots \text{ min} , \dots 2 \dots \text{ hours}$

c) $500 + \dots 232 \dots = 732$

$732 - 500 = 232$

d) $5 \times 4 = \dots 4 \dots + \dots 4 \dots + \dots 4 \dots + \dots 4 \dots + \dots 4 \dots$


e) $1 \text{ kg} = \dots \frac{1}{2} \text{ kg} \dots + \dots \frac{1}{4} \text{ kg} \dots + \dots \frac{1}{4} \text{ kg} \dots$

f) Third an hour = $\dots 20 \text{ min} \dots$


g) $15 \div 3 = 5$

h) $2 \times 4 = 8$

E) What's the time In digits ?



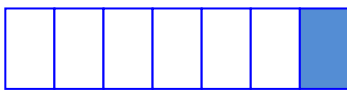
$\dots 2 \dots : \dots 20 \dots$



$\dots 4 \dots : \dots 15 \dots$

Question 4:

A) Write the fraction of the coloured parts: (in digits and letters):



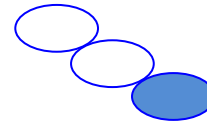
$\dots \frac{1}{7} \dots$

$\dots \text{seventh} \dots$



$\dots \frac{1}{5} \dots$

$\dots \text{Fifth} \dots$



$\dots \frac{1}{3} \dots$

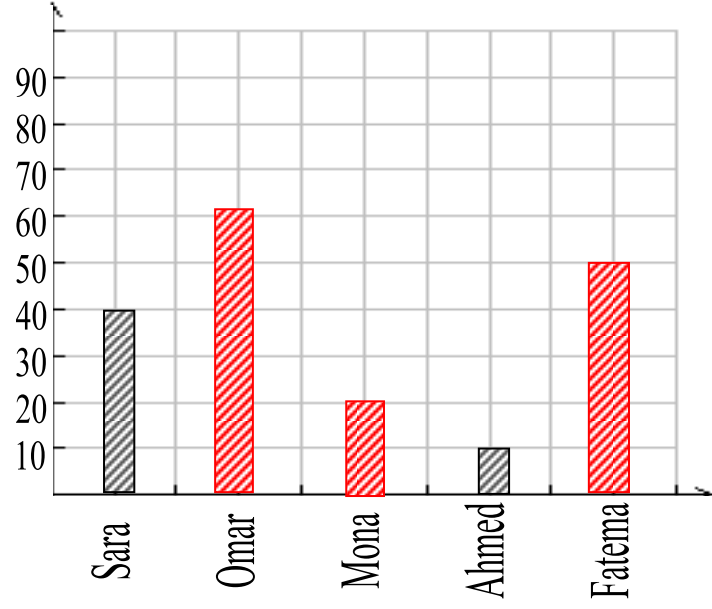
$\dots \text{Third} \dots$





B) Complete the table and the bar line graph:-

Name	Number of books
Sara	...40.....
Omar	60
Mona	20
Ahmed	...10.....
Fatema	50



Question 5:

A) Complete in the same pattern:

- $5 \times 2, 6 \times 2, 7 \times 2, 8 \times 2, 9 \times 2.$
- $210, 230, 250, 270, 290.$
- $16, 20, 24, 28, 32, 36, 40$

B) Put (✓) or (✗):

a) $5 \times 4 + 3 \times 6 = 20$ (✗)

b) The greatest 2 digit numbers is 100 (✗)

c) $6 \times 5 = 6 + 6 + 6 + 6 + 5$ (✗)

d) $6 \times 5 > 31$ (✗)

e) Just After Muharram is Ramdan (✗)

